

Put $<$, $=$ or $>$ in each circle to make the statement correct.

less than
 $<$

equal to
 $=$

greater than
 $>$

$34 \bigcirc 94$

$81 \bigcirc 87$

$44 \bigcirc 22$

$68 \bigcirc 86$

$63 \bigcirc 36$

$30 \bigcirc 13$

$100 \bigcirc 100 + 0$

$\text{ten} \bigcirc 10$

$18 \bigcirc 81$

Complete the number sentences.

3 tens and 6 ones $<$ _____

5 tens and 2 ones $<$ _____

7 tens and 9 ones $>$ _____

1 ten and 5 ones $>$ _____

Four tens = _____

Six tens and three ones = _____

Put $<$, $=$ or $>$ in each circle to make the statement correct.

less than
 $<$

equal to
 $=$

greater than
 $>$

$63 \bigcirc 36$

$30 \bigcirc 13$

$18 \bigcirc 81$

$70 + 10 \bigcirc 80$

$50 + 7 \bigcirc 75$

$99 \bigcirc 90 + 9$

$15 + 0 \bigcirc 10 + 3$

$\text{forty-seven} \bigcirc 47$

$20 + 5 \bigcirc \text{ninety}$

Complete the number sentences.

3 tens and 6 ones $<$ _____

_____ $<$ 5 tens and 2 ones

7 tens and 9 ones $>$ _____

_____ $=$ 5 tens and 9 ones


Four tens and 10 ones $=$ _____

Six tens and three ones $<$ _____




Put $<$, $=$ or $>$ in each circle to make the statement correct.

63 +
7 + 10




62 +
10 + 8

thirty
add three




13

6 tens
and 9 ones




5 tens
and 10 ones

three ones and
eight tens




eighty-three

forty-one




50 + 11

99




90 + 9

15 + 0
+ 15




twenty-nine
subtract nine

forty-seven
add three tens




three tens add
47

20 + 5




fifty-two

100
subtract
ten




10 tens

78 + 12



twelve add
seventeen

one pound



one hundred

Complete the number sentences.

Three tens and sixteen ones $<$ _____

_____ $<$ 25 ones and 19 ones

Thirteen ones, one ten and 9 ones $>$ _____

_____ = 7 tens less than eighty-one

Four tens, 10 ones and 12 ones = _____

Six tens and thirteen ones $<$ _____